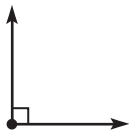


Name _____

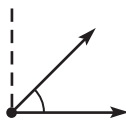
Describe Angles in Plane Shapes

There are different types of angles.

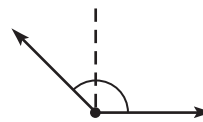
A **right angle** forms a square corner.



Some angles are less than a right angle.



Some angles are greater than a right angle.

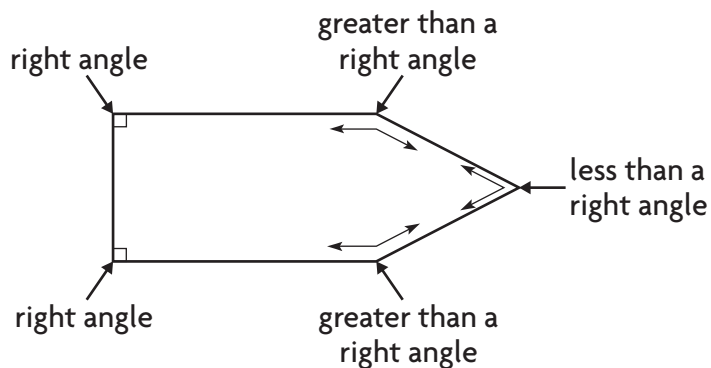


Look at this shape.
Describe the angles.

There are **2** right angles.

There are **2** angles greater than a right angle.

There is **1** angle less than a right angle.

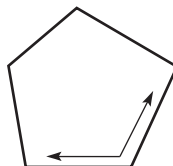


Use the corner of a sheet of paper to tell whether the angle is a **right angle**, **less than a right angle**, or **greater than a right angle**.

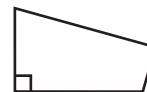
1.



2.




3.



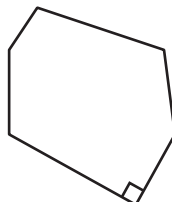
Write how many of each type of angle the shape has.

4.



___ right
___ less than a right
___ greater than a right

5.



___ right
___ less than a right
___ greater than a right

6.



___ right
___ less than a right
___ greater than a right