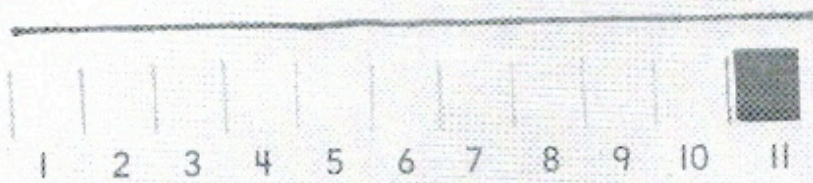


Model and Draw

A unit cube is about 1 **centimeter** long.

About how many centimeters long is this string?



You can make a mark for each centimeter to keep track and to count.

The string is about 11 centimeters long.

Share and Show




I have drawn unit cubes

Use a unit cube. Measure the length in centimeters.




about 10 centimeters

2.



about 8 centimeters

3.




about 10 centimeters

Name _____

On Your Own


Use a unit cube. Measure the length in centimeters.

4.



about _____ centimeters

5.



about _____ centimeters

6.




about _____ centimeters

7.



about _____ centimeters

8.



about _____ centimeters