



**Try This!** Write the missing word or number to name the shaded part.



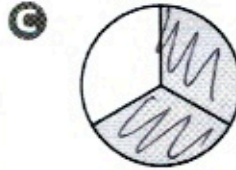
$$\frac{2}{6}$$

\_\_\_\_\_ sixths



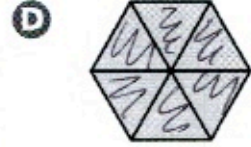
$$\frac{5}{8}$$

\_\_\_\_\_ eighths



$$\frac{2}{3}$$

two thirds



$$\frac{6}{6}, \text{ or } 1$$


six sixths, or one whole

## Share and Show



1. Shade two parts out of eight equal parts.  
Write a fraction in words and in numbers to name the shaded part.

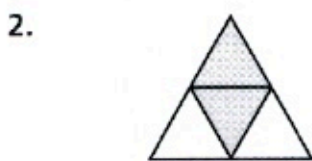
Think: Each part is  $\frac{1}{8}$ .



Read: \_\_\_\_\_ eighths

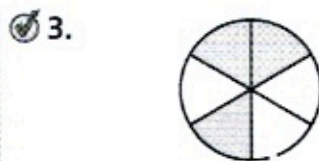
Write: \_\_\_\_\_

**Write the fraction that names each part. Write a fraction in words and in numbers to name the shaded part.**



Each part is \_\_\_\_\_.

\_\_\_\_\_ fourths



Each part is \_\_\_\_\_.

\_\_\_\_\_ sixths



Each part is \_\_\_\_\_.

\_\_\_\_\_ fourths

**Math Talk**

Math Processes and Practices 8

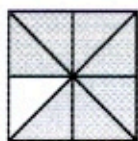
Generalize What do the numerator and denominator of a fraction tell you?

Name \_\_\_\_\_

### On Your Own

Write the fraction that names each part. Write a fraction in words and in numbers to name the shaded part.

5.



Each part is \_\_\_\_\_.

\_\_\_\_\_ eighths

\_\_\_\_\_

6.



Each part is \_\_\_\_\_.

\_\_\_\_\_ thirds

\_\_\_\_\_

7.



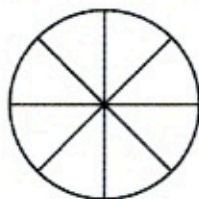
Each part is \_\_\_\_\_.

\_\_\_\_\_ sixths

\_\_\_\_\_

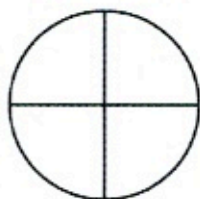
Shade the fraction circle to model the fraction. Then write the fraction in numbers.

8. six out of eight



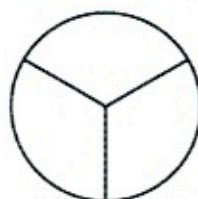
\_\_\_\_\_

9. three fourths



\_\_\_\_\_

10. three out of three



\_\_\_\_\_

11. A flag is divided into four equal sections. One section is white. What fraction of the flag is not white?

\_\_\_\_\_

12. A garden has six sections. Two sections are planted with tomatoes. Which fraction represents the part of the garden without tomatoes?

\_\_\_\_\_

13. Jane is making a memory quilt from some of her old favorite clothes that are too small. She will use T-shirts for the shaded squares in the pattern. What names the part of the quilt that will be made of T-shirts?



\_\_\_\_\_