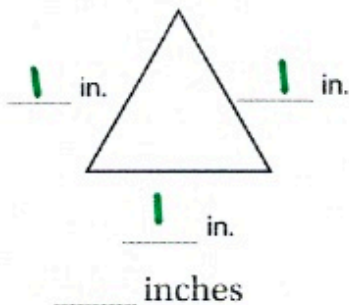


Share and Show



perimeter - Add up All of the sides

1. Find the perimeter of the triangle in inches.



Think: How long is each side?

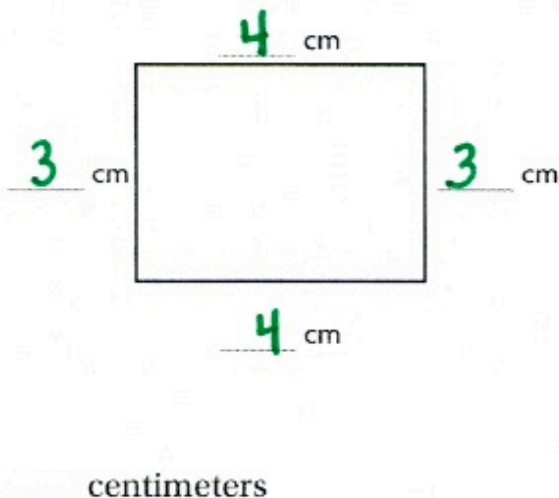
Math Talk

Math Processes and Practices 2

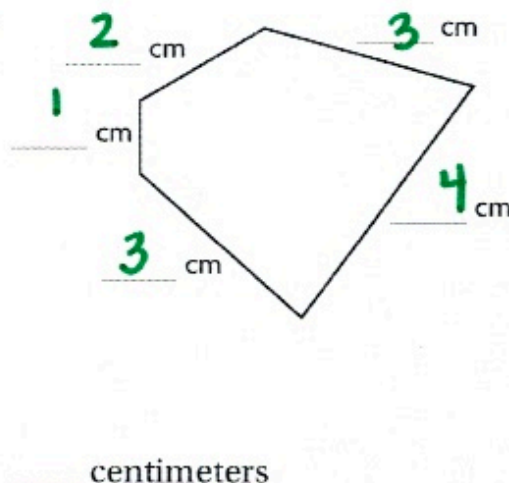
Reason Abstractly How do you use addition to find the perimeter of a figure?

Use a centimeter ruler to find the perimeter.

2.

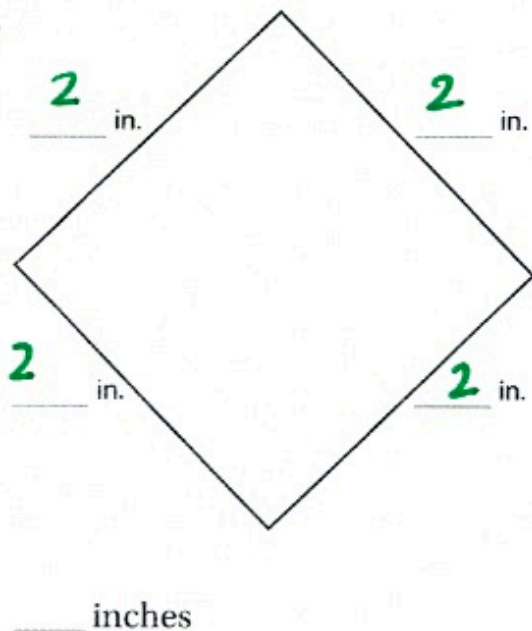


3.

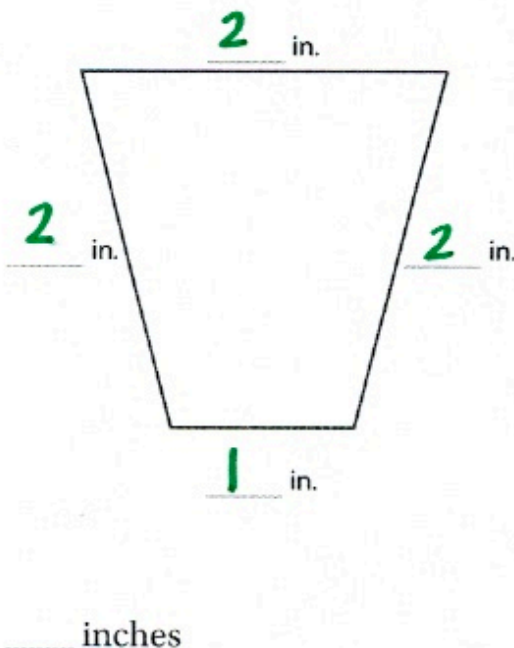


Use an inch ruler to find the perimeter.

4.



5.



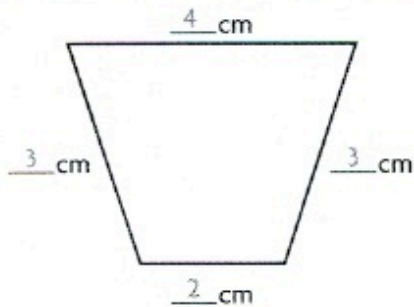
Name _____

Find Perimeter

Learning Objective You will use rulers to estimate and measure the perimeter of figures in inches and centimeters.

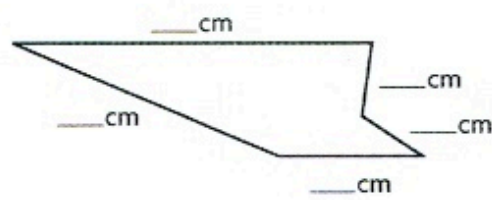
Use a ruler to find the perimeter.

1.



12 centimeters

2.



_____ centimeters

Problem Solving



Draw a picture to solve 3–4.

3. Evan has a square sticker that measures 5 inches on each side. What is the perimeter of the sticker?

4. Sophie draws a shape that has 6 sides. Each side is 3 centimeters. What is the perimeter of the shape?

optional...

5. **WRITE** *Math* Draw two different figures that each have a perimeter of 20 units.
