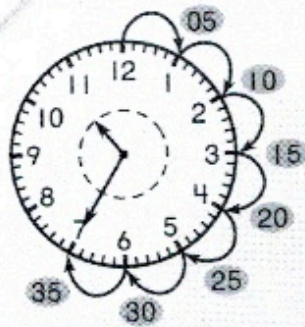


Model and Draw



What does it mean when the minute hand points to the 7?

Count by fives until you reach the 7.

Remember:
The minute hand moves from one number to the next in 5 minutes.

The hour hand points between the 10 and the 11. The minute hand points to the 7.

The time is 10:35.

There are 60 minutes in 1 hour.

Share and Show




Look at the clock hands. Write the time.

Count by 5's


1.




2.



3.



4.



5.



6.



On Your Own

Look at the clock hands. Write the time.

7.



8.



9.



10.



11.



12.



Math Processes and Practices

Use Models Look at the time.

Draw the minute hand to show the same time.

13.



14.



15.

