



Name _____

Measure in Inches and Feet

Learning Objective You will measure the length of an object to the nearest inch and to the nearest foot.

Measure to the nearest inch.
Then measure to the nearest foot.

Find the real object.	Measure.
1. bookcase 	_____ inches _____ feet
2. window 	_____ inches _____ feet

Problem Solving

3. Jake has a piece of yarn that is 4 feet long.
Blair has a piece of yarn that is 4 inches long.
Who has the longer piece of yarn? Explain.

4. **WRITE** Math Would you measure the length of a jump rope in inches or in feet? Explain your choice.

Lesson Check

1. Larry is telling his sister about using a ruler to measure length. Write **inch** or **foot** in each blank to make the sentence true.

One _____ is longer than one _____.

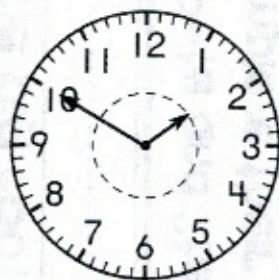
Spiral Review

2. Matt put this money in his pocket. What is the total value of this money?



\$ _____

3. What time is shown on this clock?



____ : ____

4. Ali had 38 game cards. Her friend gave her 15 more game cards. How many game cards does Ali have now?

_____ cards

