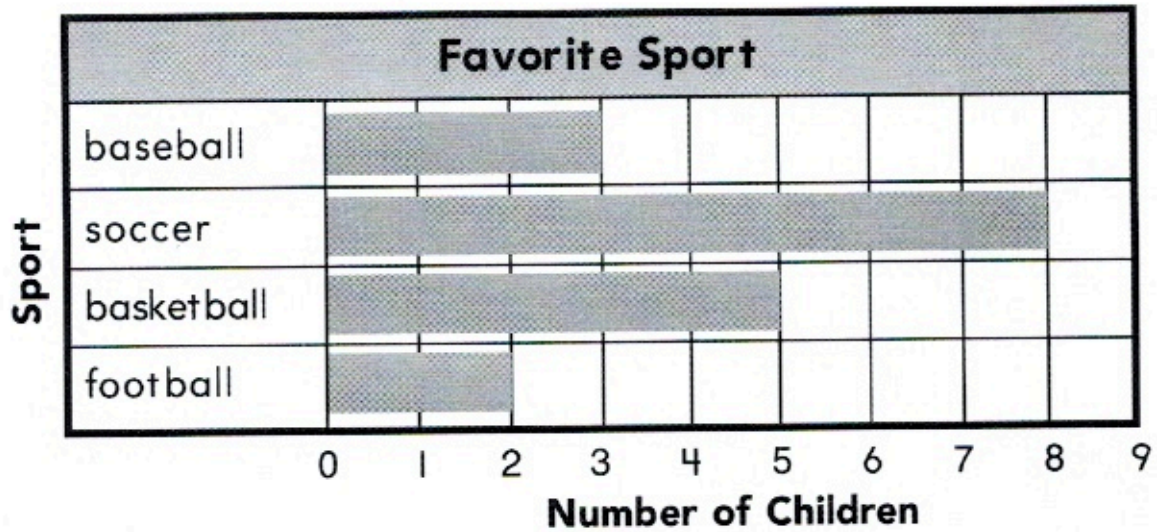


Name _____

Read Bar Graphs

Use the bar graph.

Learning Objective You will read data in bar graphs and use that information to solve problems.



- How many children chose basketball? _____ children
- Which sport did the most children choose? _____
- How many more children chose basketball than baseball? _____ more children
- Which sport did the fewest children choose? _____

Problem Solving

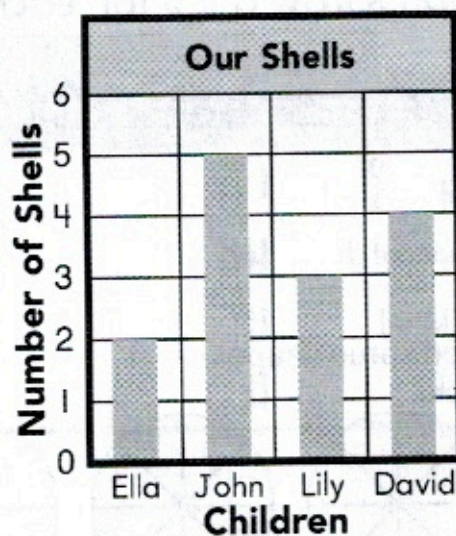
- How many children chose baseball or basketball? _____ children

- WRITE** Math Look at the bar graph above. Write about the information shown in the graph.

Lesson Check

1. Use the bar graph. How many shells do the children have in all?


_____ shells



Spiral Review

2. Use the line plot. How many twigs are 3 inches long?

_____ twigs



3. Use a centimeter ruler. What is the length of the yarn to the nearest centimeter?



_____ centimeters

4. Noah uses 1 quarter and 2 nickels to pay for a pencil. How much money does he pay for the pencil?

_____ ¢ or _____ cents