

Name _____

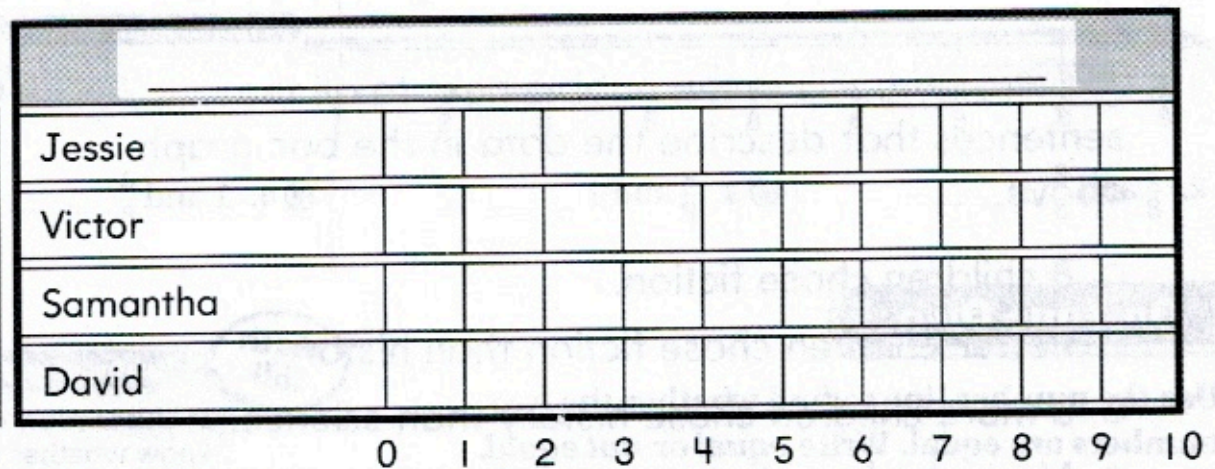
Make Bar Graphs

Learning Objective You will draw a bar graph to represent a data set with up to four choices.

Maria asked her friends how many hours they practice soccer each week.

- Jessie practices for 3 hours.
- Victor practices for 2 hours.
- Samantha practices for 5 hours.
- David practices for 6 hours.

1. Write a title and labels for the bar graph.
2. Draw bars in the graph to show the data.



3. Which friend practices soccer for the most hours each week? _____


Problem Solving Real World

4. Which friends practice soccer for fewer than 4 hours each week? _____

5. WRITE **Math** Look at the bar graph above. Describe how you shaded bars to show the data. _____

Lesson Check

1. Use the bar graph.
How many more children chose summer than spring?



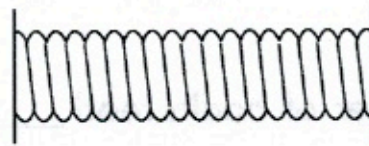
_____ more children

Spiral Review

2. Rachel's chain is 22 centimeters long. She takes 9 centimeters off the chain. How long is Rachel's chain now?

_____ centimeters

3. Use an inch ruler. What is the length of the yarn to the nearest inch?



_____ inches

4. Gail finished studying at quarter past 1. What time did Gail finish studying?

_____ : _____

5. Jill has two \$1 bills, 1 quarter, and 1 nickel. How much money does Jill have?

\$ _____

