

Name \_\_\_\_\_

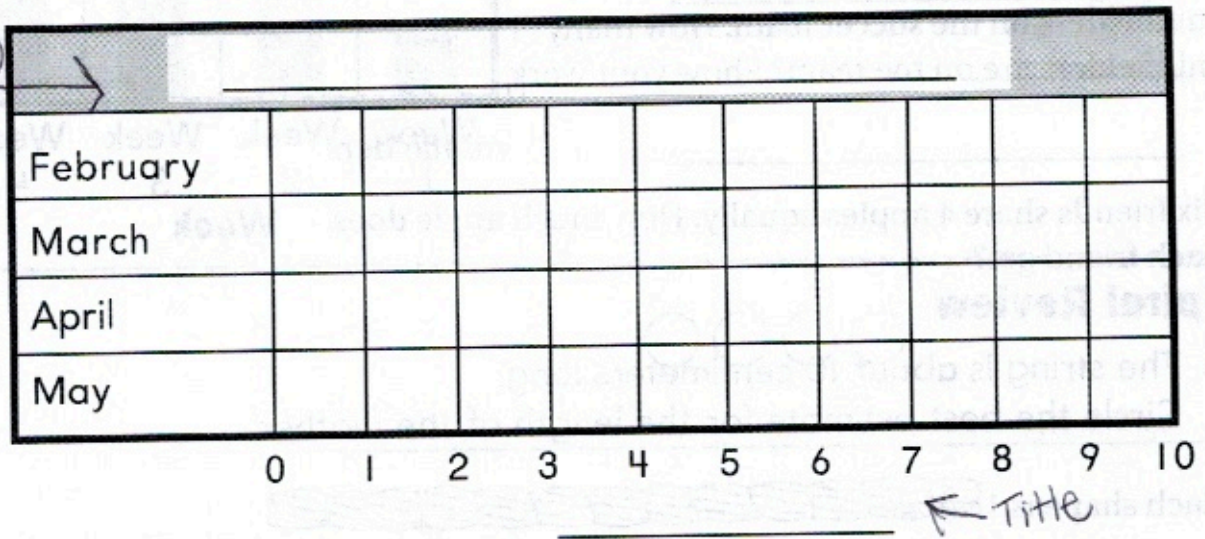
**Problem Solving • Display Data**

**Learning Objective** You will use the strategy *make a graph* to solve problems about data.

**Make a bar graph to solve the problem.**

- The list shows the number of books that Abby read each month. Describe how the number of books she read changed from February to May.

February	8 books
March	7 books
April	6 books
May	4 books



The number of books read \_\_\_\_\_

- How many books in all did Abby read in February and March? \_\_\_\_\_ books

- In which months did Abby read fewer than 7 books? \_\_\_\_\_

- WRITE** Math Explain how you decided where the bar for March should end. \_\_\_\_\_

## Lesson Check

1. Use the bar graph. Describe how the amount of practice time changed from Week 1 to Week 4.

The amount of practice time

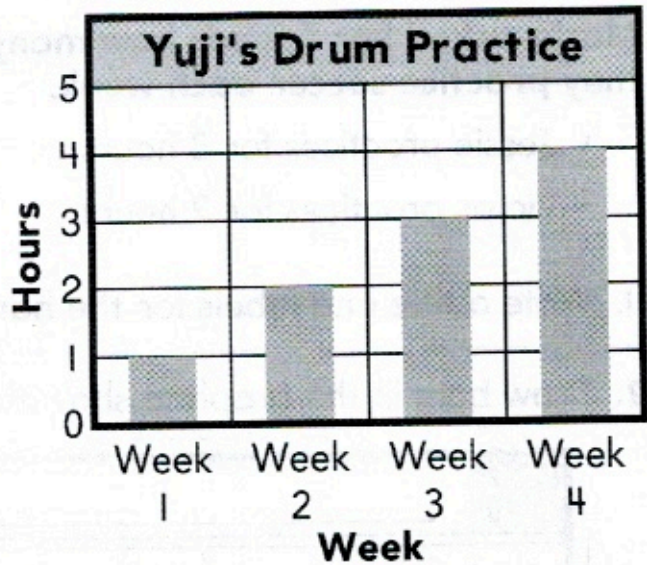
---



---




---



## Spiral Review

2. The string is about 10 centimeters long.  
Circle the best estimate for the length of the feather.



2 centimeters      3 centimeters      7 centimeters

3. What is the total value of this group of coins?



\_\_\_\_\_ ¢ or \_\_\_\_\_ cents

4. Rick has one \$1 bill, 2 dimes, and 3 pennies. How much money does Rick have?

\$ \_\_\_\_\_