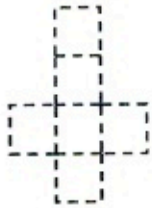
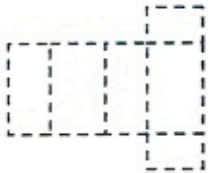



Name _____

Match Shapes and Faces

Patterns for three-dimensional shapes are called nets. If you fold a net, it makes a three-dimensional shape.

Look at the net. Circle the name of the shape it makes.

<p>1.</p> 	<p>cube cylinder cone</p>
<p>2.</p> 	<p>cube rectangular prism cylinder</p>
<p>3.</p> 	<p>cube cone rectangular prism</p>



Writing and Reasoning In Exercise 1, how did you know which shape the faces on the net made?
