


Name _____

Sides and Angles


1. Draw a pentagon.
Write how many angles.

_____ angles




-
2. Draw a triangle.
Write how many sides.

_____ sides



-
3. Draw a quadrilateral.
Write how many angles.

_____ angles



Writing and Reasoning Look at the shapes you drew. What do you notice about the number of sides and angles for each?
