


Model and Draw

The bead is 1 inch long. Use this bead to help find how many beads will fit on the string. Which is the best estimate for the length of the string?



2 inches

5 inches

8 inches

2 inches is too short.

5 inches is about right.

8 inches is too long.

Share and Show

MATH BOARD

Circle the best estimate for the length of the string.

1.



1 inch

3 inches

5 inches

2.



2 inches

4 inches

6 inches

3.



4 inches

6 inches

8 inches

Name _____

On Your Own

Circle the best estimate for the length of the string.

4.



4 inches

7 inches

10 inches

5.




3 inches

6 inches

9 inches

6.


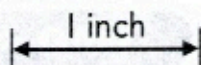


1 inch

3 inches

5 inches

7. **THINK SMARTER** Use the 1-inch mark. Estimate the length of each ribbon.



Estimates:

red ribbon: about _____ inches

blue ribbon: about _____ inches

