

Name _____



Mid-Chapter Checkpoint



Personal Math Trainer


Online Assessment
and Intervention


Concepts and Skills

Use color tiles. Measure the length of the object in inches.

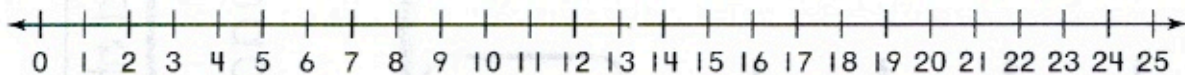
1.  about _____ inches

The bead is one inch long. Circle the best estimate for the length of the string.

2. 
1 inch 2 inches 5 inches

Draw a diagram. Write a number sentence using a  for the missing number. Solve.

3. A mark is 17 inches long. Katy erases 9 inches from the mark. How long is the mark now?



The mark is _____ inches long now.

4. **THINKSMARTER** Use an inch ruler. What is the length of the string to the nearest inch?

