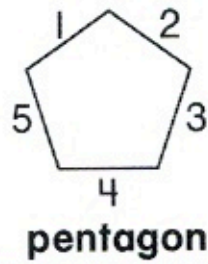


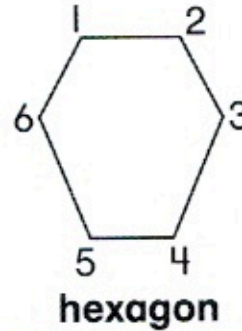
Name _____

Two-Dimensional Shapes

Count sides and vertices.
A pentagon has 5 sides.



A hexagon has 6 vertices.




Write the number of sides and the number of vertices.

1. triangle



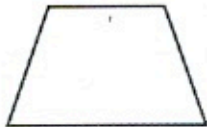
___ sides
___ vertices

2. rectangle



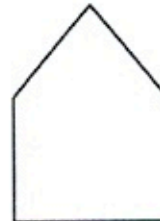
___ sides
___ vertices

3. quadrilateral



___ sides
___ vertices

4. pentagon



___ sides
___ vertices