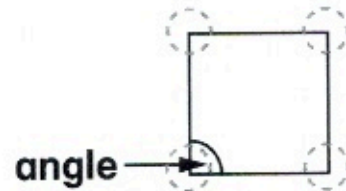


Name _____

Angles in Two-Dimensional Shapes

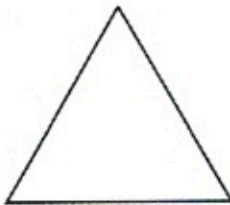
Two sides meet and form an angle.

There are 4 angles in a square.



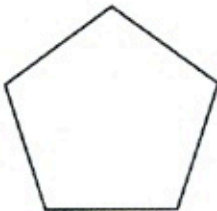
Circle the angles in each shape.
Write how many.

1.




_____ angles

2.



_____ angles

3.



_____ angles