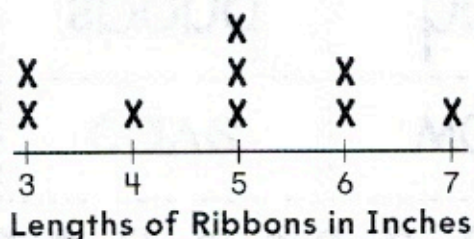


Name _____

5. Dalia made a line plot to show the lengths of her ribbons.



How many ribbons are shown in the line plot?

The line plot shows _____ ribbons.

How many ribbons are 6 inches long?

_____ ribbons

6. Use the words on the tiles to make the sentence true.

The table is 3 _____ long.


The belt is 30 _____ long.

The hallway is 15 _____ long.

inches

feet

7. Use the 1-inch mark. Estimate the length of each object.




about _____ inches




about _____ inches

8. Use an inch ruler. What is the length of the paper clip to the nearest inch?



_____ inches

9. Estimate how many 12-inch rulers will be about the same height as a classroom door. Does the sentence describe the door? Choose Yes or No.



- The door is about 8 feet high. Yes No
- The door is less than 3 rulers high. Yes No
- The door is more than 20 feet high. Yes No
- The door is less than 15 rulers high. Yes No